




CALIBREMATH LEARNING CENTRE
DEVELOPING YOUR MAXIMUM CALIBRE

Primary 1

Math

Pre Assessment



Name:

Class:



www.calibremath.com



96723540



In this paper, we have included basic skills which are critical for Pri I.

For example, to learn Time, your child will need to know how to do skip counting by 5.

Do note that they are not PI level questions.

Objective of this Pre-Assessment:

- **Assess if your child has the basic skills needed for the PI syllabus.**
- **Identify learning gaps that your child can work on**





What makes 10? Fill in the missing numbers below.



1.

$$\boxed{2} + \boxed{} = \boxed{10}$$

2.

$$\boxed{} + \boxed{4} = \boxed{10}$$

3.

$$\boxed{3} + \boxed{} = \boxed{10}$$

4.

$$\boxed{} + \boxed{3} + \boxed{5} = \boxed{10}$$





Write down the sum for each question.

5.

$$\boxed{9} + \boxed{6} = \boxed{}$$

6.

$$\boxed{8} + \boxed{5} = \boxed{}$$

7.

$$\boxed{7} + \boxed{6} = \boxed{}$$

8.

$$\boxed{3} + \boxed{9} + \boxed{7} = \boxed{}$$





Read the story sum and write down the equation in the boxes below.

9. Lily has 3 cookies initially.
Her brother gave her 4 more cookies.
How many cookies does Lily have now?

<input type="text"/>	<input type="text"/>	<input type="text"/>	=	<input type="text"/>
----------------------	----------------------	----------------------	---	----------------------

Lily has _____ cookies now.





Read the story sum and write down the equation in the boxes below.

10. Peggy bought 9 candies.
She ate 5 candies.
How many candies does Peggy have now?

<input type="text"/>	<input type="text"/>	<input type="text"/>	=	<input type="text"/>
----------------------	----------------------	----------------------	---	----------------------

Peggy has _____ candies now.






11. 2 more than 4 is _____.

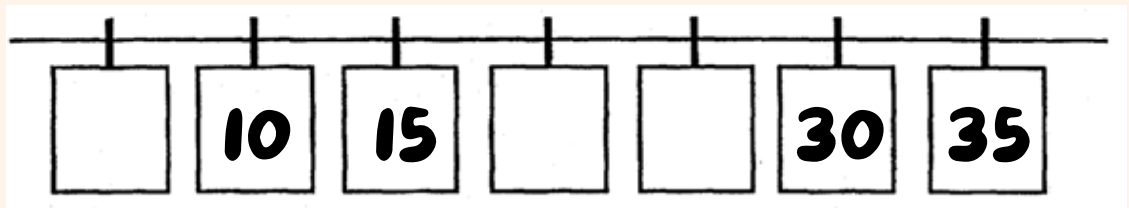
12. 3 more than 5 is _____.

13. 3 less than 7 is _____.

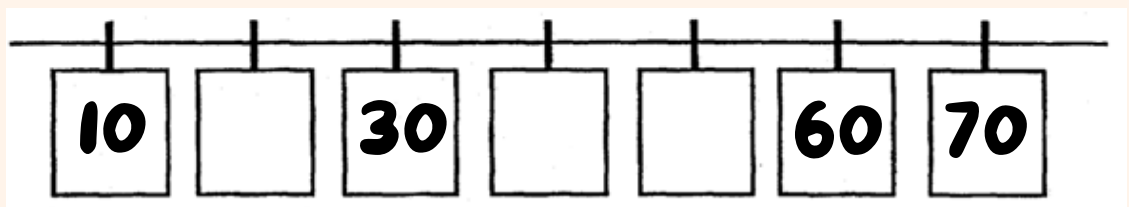
14.



15.

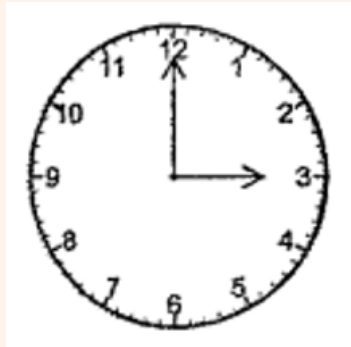


16.



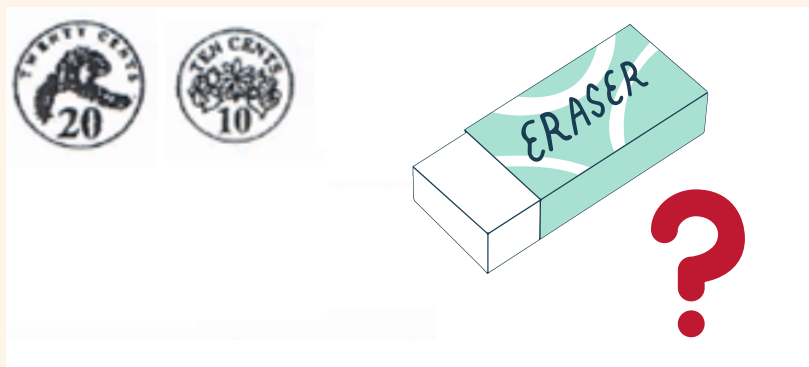


17. The clock below shows the time Messi takes his afternoon nap.



Messi takes his nap at _____ p.m.

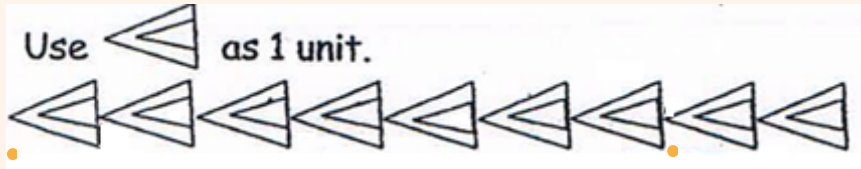
18. Thano wants to buy an eraser.
How much does the eraser cost?




The eraser costs _____ cents.

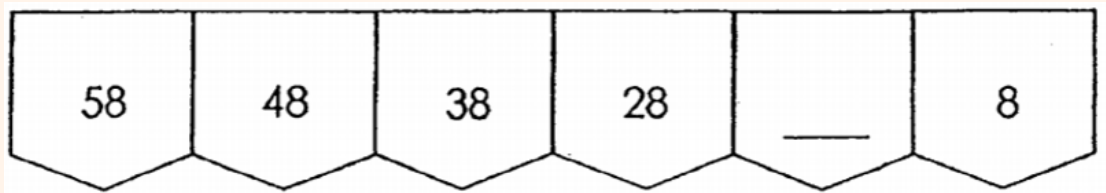


19. What is the length of the shoe below?



The shoe is _____  long.

20. Write the missing number in the space below.





Answer Key

1. 8

2. 6

3. 7

4. 2

5. 15

6. 13

7. 13

8. 19

9. 7

10. 4

11. 6

12. 8

13. 4

14. 6, 10, 14

15. 5, 20, 25

16. 20, 40, 50

17. 3:00

18. 30

19. 7

20. 18

